

# Blockbuster Movie Sales


Name: \_\_\_\_\_

Your task: To analyze the movie sales of the three films below. Write a one sentence analysis describing each graph. Then evaluate the graphs to answer the final question.

## *Chicken Little*

Week	T. Sold*
1	18.2
2	10.4
3	9.1
4	7.7
5	10.2
6	6.5

### Sketch Resulting Graph



Describe this movies sales:

---

---

---


---

---

## *Harry Potter and the Goblet of Fire*

Week	T. Sold*
1	34.3
2	28.2
3	20.2
4	14.5
5	15.3
6	13.2

### Sketch Resulting Graph



Describe this movies sales:

---

---

---


---

---

## *The Lion, the Witch and the Wardrobe*

Week	T. Sold*
1	42.1
2	20.6
3	11.4
4	7.2
5	12.0
6	6.2

### Sketch Resulting Graph



Describe this movies sales:

---

---

---

---

---

Which movie will most likely produce the most profits based on current trend of ticket sales? \_\_\_\_\_ How do you know? \_\_\_\_\_

Which week was likely the first week of winter break? \_\_\_\_\_